

Volume Practice Sheet


Name: _____

Date: _____


Per: _____

Figure out the volume of the following regular shaped objects. **Show your Work!**

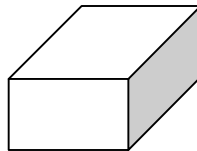
1. _____ mL




2. _____ mL



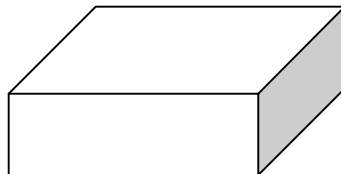
3. _____ mL



4. _____ mL



5. _____ mL



6. _____ mL

